



DELHI PUBLIC SCHOOL GAYA


(Under the aegis of the Delhi Public School Society, New Delhi)
Affiliated to C.B.S.E, New Delhi Affiliation No.330530, School Code - 65572

WINTER VACATION ASSIGNMENT CLASS-II (SESSION: 2023-24)

Are you looking for some interesting fun learning assignment to make your learning session interesting and engaging? Here in this assignment, you will find some very interesting and engaging tasks that will be fun solving.

ENGLISH

1. Make a New Year Paper Plate Countdown Clock using a round paper plate, colour papers, marker, googly eyes and colours just like the picture shown below:



2. Complete 5 pages in your Cursive Writing book in beautiful handwriting.

3. Fill in the blanks using the correct joining words:

- (a) The boys _____ girls are wearing black coat.
- (b) The girl has a ring _____ the man doesn't.
- (c) Three _____ two make five.
- (d) Garima went to school _____ Bobby stayed at home.
- (e) Either Anna _____ Arjun is coming today.
- (f) Put your school dress _____ shoes in the cupboard.
- (g) India is a country _____ Delhi is a city.
- (h) White _____ black are both colours.
- (i) Do you like tea _____ coffee?
- (j) I like to watch movies _____ she likes to read books.

4. Write the opposite of the underlined word in each sentence:

- (a) The table is hard. _____
- (b) I live far from my grandparents. _____
- (c) Have you lost your pencil? _____
- (d) My friend came too late. _____
- (e) My brother is sitting on the sofa. _____





- (f) Mita is sad about the party. _____
- (g) I am a slow runner. _____
- (h) I like cold coffee. _____
- (i) My friend has a beautiful garden. _____
- (j) Ram and Anuj have the same pencil box. _____

5. Complete the following sentences using “and”, “or”, “but”.

- (a) Anju is clever _____ beautiful. (and / but)
- (b) My brother is tall _____ handsome. (and / but)
- (c) Roses are beautiful _____ they have thorns. (and / but)
- (d) Rahul is clever _____ he does not work hard. (and / but)
- (e) Would you like to play football _____ cricket? (but / or)
- (f) She finished her homework _____ went out to play. (and / but)
- (g) He was hungry _____ he didn't eat anything. (and / but)
- (h) Summers are warm _____ winters are cold. (and / but)

हिन्दी

1. नीचे दिए गए चित्रों में अपना मनपसंद रंग भरिए व उनका नाम लिखिए।



2. नीचे दिए गए समान अर्थ वाले शब्दों का मिलान कीजिए: –

सूर्य	नीर
आकाश	अग्नि
पृथ्वी	दिनकर
चंद्रमा	गगन
मनुष्य	चाँद
समुद्र	नीरद
जल	धरती
बादल	सिंधु
आग	आदमी

3. नीचे दिए गए चित्र को देखकर विलोम शब्द लिखिए: –



दिन –



बड़ा –




हँसना –



पतला –


4. नीचे दिए गए चित्रों में रंग भरकर इनके लिए पाँच वाक्य लिखिए: —




5. 'निर्झर मोती' पुस्तक से पाँच पृष्ठ सुलेख लिखें।

MATHEMATICS


1. Look at the given pictures of the clocks and answer the following questions:-



1. What time is it on the clock? _____
 2. What time will it be in 3 hours? _____
 3. What time will it be in 10 minutes? _____
 4. What time was it 30 minutes ago? _____
-



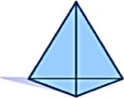






1. What time is it on the clock? _____
 2. What time will it be in 5 minutes? _____
 3. What time will it be in 4 hours? _____
 4. What time was it 10 minutes ago? _____
-



1. What time is it on the clock? _____
2. What time will it be in 25 minutes? _____
3. What time will it be in 6 hours? _____
4. What time was it 15 minutes ago? _____

2. Circle the correct word to describe each shape: -

1)		cone	sphere	cylinder	prism
2)		cube	sphere	cone	pyramid
3)		pyramid	cuboid	cylinder	prism
4)		sphere	cone	pyramid	cube

5)		pyramid	cuboid	prism	cylinder
6)		prism	cone	pyramid	sphere
7)		sphere	prism	cone	cylinder

3. See the calendar below and answer the given questions: -

May						
S	M	T	W	T	F	S
1	2	3	4	5	6	7
8	9	10	11	12	13	14
15	16	17	18	19	20	21
22	23	24	25	26	27	28
29	30	31				

Fun Facts

There are 12 months in one year.
 There are 7 days in one week.
 There are 52 weeks in one year.
 There are 365 days in one year.

How many days are in the month of May?
 There are _____ days in May.

Complete .

There are _____ days in September.

September 14th is on a _____.

There are _____ days in one week.

There are _____ Fridays in September 2011.

The last day of September is on a _____.

September 2011						
S	M	T	W	T	F	S
				1	2	3
4	5	6	7	8	9	10
11	12	13	14	15	16	17
18	19	20	21	22	23	24
25	26	27	28	29	30	

January 2012						
S	M	T	W	T	F	S
1	2	3	4	5	6	7
8	9	10	11	12	13	14
15	16	17	18	19	20	21
22	23	24	25	26	27	28
29	30	31				

There are _____ days in January.


January 14th is on a _____.

There are _____ weeks in one year.

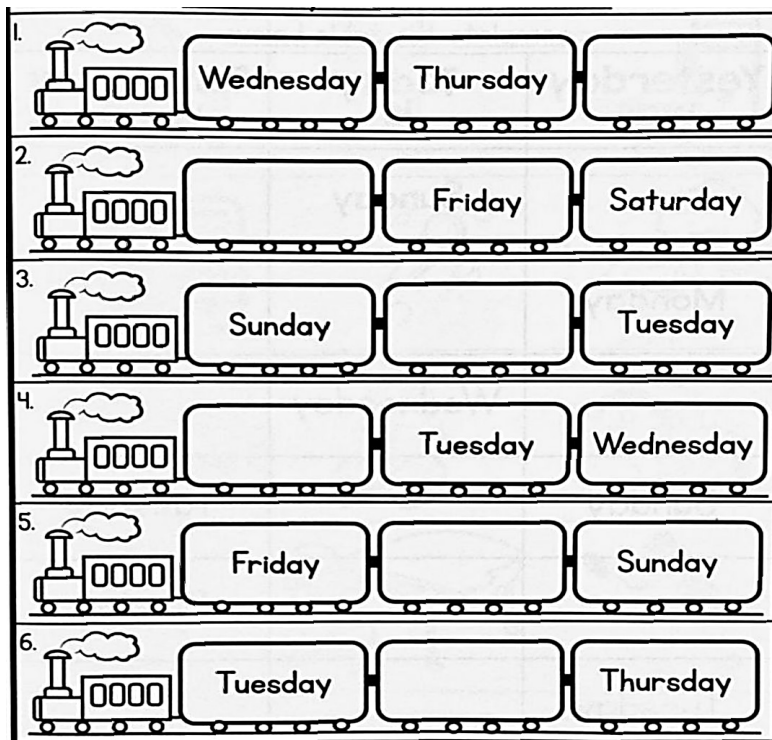
There are _____ Fridays in January 2012.

The second day of January is on a _____.

4. Complete the pattern given below: -



5. What day comes before/after: -



6. Draw a model of a clock using paper plate.

COMPUTER

1. Write shortcut keys for the following: -

- (a) New _____.
- (b) Open _____.
- (c) Save _____.

2. Match the following.

Column A

- (a) Magnifier Tool
- (b) Text Box
- (c) Eraser Tool
- (d) Pencil Tool
- (e) Curve Tool
- (f) Brushes Tool

Column B



3. Fill the image with proper colors: -

