



# DELHI PUBLIC SCHOOL GAYA

(Under the aegis of the Delhi Public School Society, New Delhi)  
Affiliated to C.B.S.E, New Delhi Affiliation No.330530, School Code – 65572

## WINTER VACATION ASSIGNMENT CLASS-III (SESSION: 2024-25)

Your Winter Vacation assignment has some very interesting tasks that will make your learning session fun and engaging. So, let's start!

### ENGLISH

1. Write a paragraph on “Why Do You Think the Moon is Special to Us”.
2. Fill in the blanks with the correct form of the verb given in the brackets-
  - (a) I \_\_\_\_\_ (play) in the park yesterday.
  - (b) She is \_\_\_\_\_ (read) a book now.
  - (c) They \_\_\_\_\_ (go) to the zoo tomorrow.
  - (d) He \_\_\_\_\_ (eat) an apple yesterday.
  - (e) We \_\_\_\_\_ (dance) at the party tonight.
3. Write one sentence each about yourself in Past Tense, Present Tense and Future Tense.
4. Draw three pictures to show something you did in the past, something you are doing now, and something you have planned to do in the future.
5. Complete the next 5 pages of your “Cursive Writing Book”.

### हिन्दी

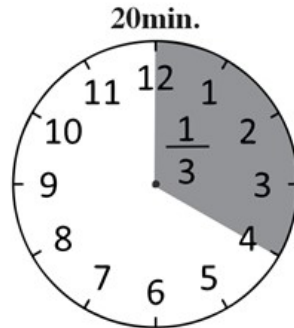
1. निम्नलिखित शब्दों के तीन-तीन पर्यायवाची शब्द लिखिए और वाक्य में प्रयोग कीजिए।
  - (क) आग
  - (ख) सुबह
  - (ग) राजा
  - (घ) जल
  - (ङ) बादल
2. निम्नलिखित में से किसी एक विषय पर 50 से 60 शब्दों में अनुच्छेद लिखिए।
  - (क) सूर्य का हमारे जीवन में महत्व
  - (ख) स्वच्छता का महत्व
  - (ग) सर्दी का मौसम
3. आपकी पाठ्यपुस्तक ‘सुनहरी धूप’ में ‘शहर का बच्चा-गाँव का बच्चा’ कविता याद करें और बताएँ कि आप शहर/गाँव में से कहाँ रहना पसंद करेंगे और क्यों?
4. सर्दी के मौसम पर आधारित छोटी डायरी लिखिए जिसमें हर दिन का विवरण, अपनी गतिविधियाँ और अपने अनुभवों को लिखिए।  
सामग्री: नोटबुक, पेंसिल, रंगीन कलम।
5. पृष्ठ संख्या 30 से 40 तक सुलेख कार्य करें।

## MATHEMATICS

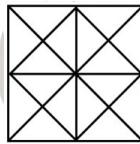
1. Draw the pictures of 3 containers each that can hold:
  - (a) more than 1 Litre of water.
  - (b) less than 1 Litre of water.
2. Draw the dial of clocks and represent each of the following fractions.

One is done for you.

$$\frac{1}{3}, \frac{1}{2}, \frac{1}{4}, \frac{1}{6}, \frac{1}{12}$$



3. How many triangles are there in the given figure?



4. The bell timing of our school is given below. Draw the clocks and show the time in each case.

1st period – 09:35 a.m.

2nd period – 10:10 a.m.

3rd period – 10:45 a.m.

4th period – 11:15 a.m.

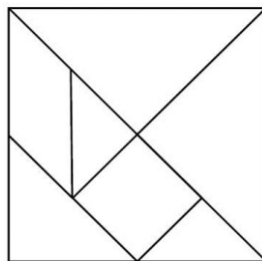
5th period – 12:00 noon

6th period – 12:30 p.m.

7th period – 1:00 p.m.

### Activity

5. The tangram is an old Chinese puzzle, consisting of a square broken up into various geometrical shapes. A 7-piece tangram is given below. Cut out all the 7 pieces of the Tangram, colour and paste them on an A4 sized paper to make the shape of an animal, people or thing.



## ENVIRONMENTAL STUDIES


### 1. Answer the following questions:

- (a) Can rainwater harvesting help people who live in dry places such as desert? How?
  - (b) The invention of wheel is considered the most important invention. What do you think if wheel was not invented? Will it change today's travelling scenario?
  - (c) Using eco-friendly fuel like CNG (Compressed Natural Gas) in vehicles reduces air pollution or not? Justify your answer.
2. Collect and paste four different postal stamps in your assignment copy. Design a stamp of your own.
  3. Make 3D model of a compass showing four main directions and sub directions.

***Note: Questions 1 and 2 are to be written in your assignment notebook. Please present your answers clearly and systematically.***

## COMPUTER

1. Write the four ways to change the backdrop of the stage in Scratch.
2. Which block is used to repeat the coding for several times in Scratch?
3. Write five example of AI devices which are used at homes for our daily life.
4. Write the coding to display the design by the sprite on the stage.



5. Make a model of any simple AI device and submit to the subject teacher.

-----X-----