



DELHI PUBLIC SCHOOL GAYA

(Under the aegis of the Delhi Public School Society, New Delhi)

Affiliated to C.B.S.E, New Delhi Affiliation No.330530, School Code – 65572

DIWALI & CHHATH PUJA HOLIDAY ASSIGNMENT CLASS-III (SESSION: 2024-25)

Looking for some interesting fun learning assignment to make your learning session interesting and engaging! Here in this assignment, you will find some very interesting and engaging tasks that will be fun solving.

ENGLISH

1. Write a sentence using the word "happy."
2. Identify the verb in this sentence:
"The bird sings beautifully."
3. Change the following sentence into question:
"She likes to play."
4. Fill in the blank with the correct word:
"The sun is very ____ (hot/cold) today."
5. Create a mini-book about your favourite animal with cover page and use pictures, to describe it.
6. Explain the significance of the Sun God (Surya) in Chhath Puja.
7. Cursive writing: Till page number 60 in your 'Cursive Writing' book.
Complete pg. 51 to 60

हिन्दी

1. नरक चतुर्दशी क्यों मनाया जाता है? 3-4 वाक्यों में लिखिए।
2. छठ-पूजा में सूर्य भगवान की पूजा क्यों की जाती है? 3-4 वाक्यों में लिखिए।
3. दीपावली को 'दीपों का त्योहार' क्यों कहा जाता है? 3-4 वाक्यों में लिखिए।
4. प्राकृतिक वस्तुओं का प्रयोग कर ए-4 साइज़ पेपर पर रंगोली बनाइए।
6. 'अनेक शब्दों के लिए एक शब्द' में से संख्या (11-22) तक अपनी उत्तर पुस्तिका में लिखिए।
7. 'निर्झर मोती पुस्तिका' में पृष्ठ संख्या (46-50) तक सुलेख लिखिए।
8. दिवाली पाँच दिनों का त्योहार है। इन पाँचों दिनों का महत्त्व अपनी उत्तर-पुस्तिका में लिखिए।

MATHEMATICS

1. In India, rupees (₹) and paise (p) are used as currency to count money. Other countries of the world use different currencies to count the money. Take help from your elders or the internet and match the following:




Country/ Continent

Japan
 The United States of America
 Malaysia
 Germany
 The United Kingdom

Currency (Symbol)

Dollar (\$)
 Pound (£)
 Euro (€)
 Yen (¥)
 Ringgit (RM)

2. Vishal goes to the market with ₹46 in his pocket. He buys two of the following items. How much money is he left with?

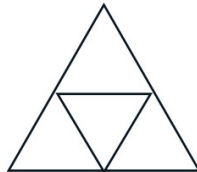
(a)		₹ 29
(b)		₹ 16
(c)		₹30

3. Convert each of the following into rupees and paise.
 (a) 2965p (b) 187p (c) 30003p
4. Write the fractional numbers for each of the following fractions.
 (a) $\frac{6}{9}$ (b) $\frac{7}{16}$ (c) $\frac{1}{12}$
5. What is the fraction of odd numbers in the given table?

7	19	10
22	25	74
31	83	66

Activity Based Questions:

6. Colour $\frac{1}{2}$ of the given shape into green, $\frac{1}{4}$ blue and $\frac{1}{4}$ red.



7. When you visit a market, shopping mall or railway station with your family members, request your elders to get each one of you weighed. Make a family Mass Chart and note down each of your family member's mass in it, along with other details such as age and height.

Note : Do Q no. 1 to 5 in Maths Assignment Notebook and Q no. 6 and Q no. 7 in an A-3 sized paper.

ENVIRONMENTAL STUDIES

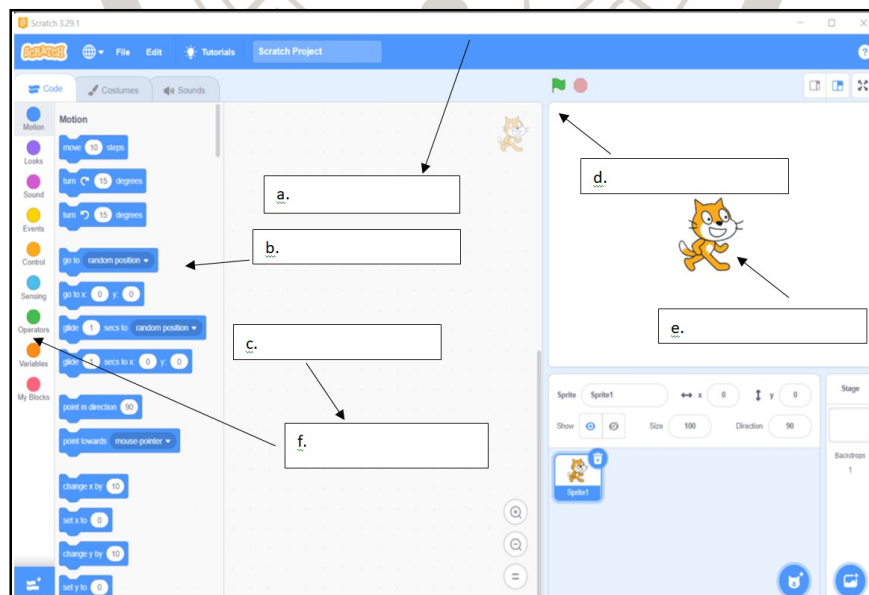
1. Write a short note on a journey by your favourite means of transport.
2. Draw a temporary house and name it.
3. Why do maps have a scale?
4. Is it a good practice to burn crackers on festivals? Justify your answer.
5. Collect different kinds of cloth fabric samples and paste them in your assignment notebook with their names.
6. Newspaper is a means of mass communication that contains news and information about some important events happening in the world.
 - Paste cut-outs of any four important news from the newspaper including important events/sports/politics, etc.(In your assignment notebook.)
7. Make a model of water cycle using eco-friendly materials.

OR


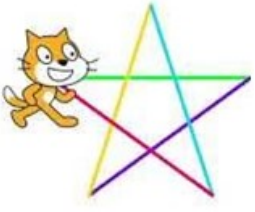
Make a model of a water source using eco-friendly materials.

COMPUTER

1. Aarav wants to make a scratch project to move the Sprite forward by 20 steps. Suggest him an appropriate block to perform this action.
2. Chirag wants to change the thickness of the pen while a trail behind the sprite. Suggest the right block for him to use.
3. Name the company that developed Scratch.
4. Label the various parts of the given scratch window in computer assignment copy.



5. Write codes to perform the scratch output in assignment copy.

(a)		(b)	
-----	---	-----	---

6. Observe the following maze. Draw the path for the Crocodile to reach the zoo. Take printout and paste it in assignment copy.

