



DIWALI & CHHATH PUJA HOLIDAY ASSIGNMENT CLASS- PREPARATORY (SESSION: 2024-25)

Are you looking for some fun assignments to make your learning session interesting and engaging? In this assignment, you will find some tasks that will make your learning fun-filled and enjoyable.

Name : _____ Class/Sec.: _____

ENGLISH

Diwali Celebration

1. Colour the diyas:




2. True or False:

- (a) We should throw garbage on the road.
- (b) We should keep our surrounding dirty.
- (c) We should throw garbage in the dustbin.

- English Candy Cursive: Complete page 74 to 80.
- Hindi Sulekh : Complete page 61 to 74

3. Colour and decorate the Rangoli pattern:




4. Choose the correct blend to complete the word:

dr fr tr br cr



— og




— uck



— um



— ush



— unk



— op



— uit



— ink



— ab



— ee


5. Choose from the following words to fill the gaps in the sentences:

fish	sheep	shed	shop	shut
-------------	--------------	-------------	-------------	-------------

- (a) The were on the hills.
- (b) The shop was for the day.
- (c) Mum went to the to get some cookies.
- (d) There were six in the tank.
- (e) Dad got his toolbox from the

6. Draw any two pictures given in the boxes.

<i>fish ship shell</i>	<i>shop cash dish</i>
------------------------	-----------------------



नाम:-.....कक्षा.....अनुक्रमांक.....

1. ई (ी) की मात्रा वाले शब्द-

अक्षर और मात्राओं को जोड़कर शब्द बनाएँ-

प + ी + ल + ा =

त + ी + र =

ह + ा + थ + ी =

द + ह + ी =

च + ा + ब + ी =


न + द + ी =

प + ा + न + ी =

प + क्ष + ी =

ख + ी + र =

र + ा + न + ी =



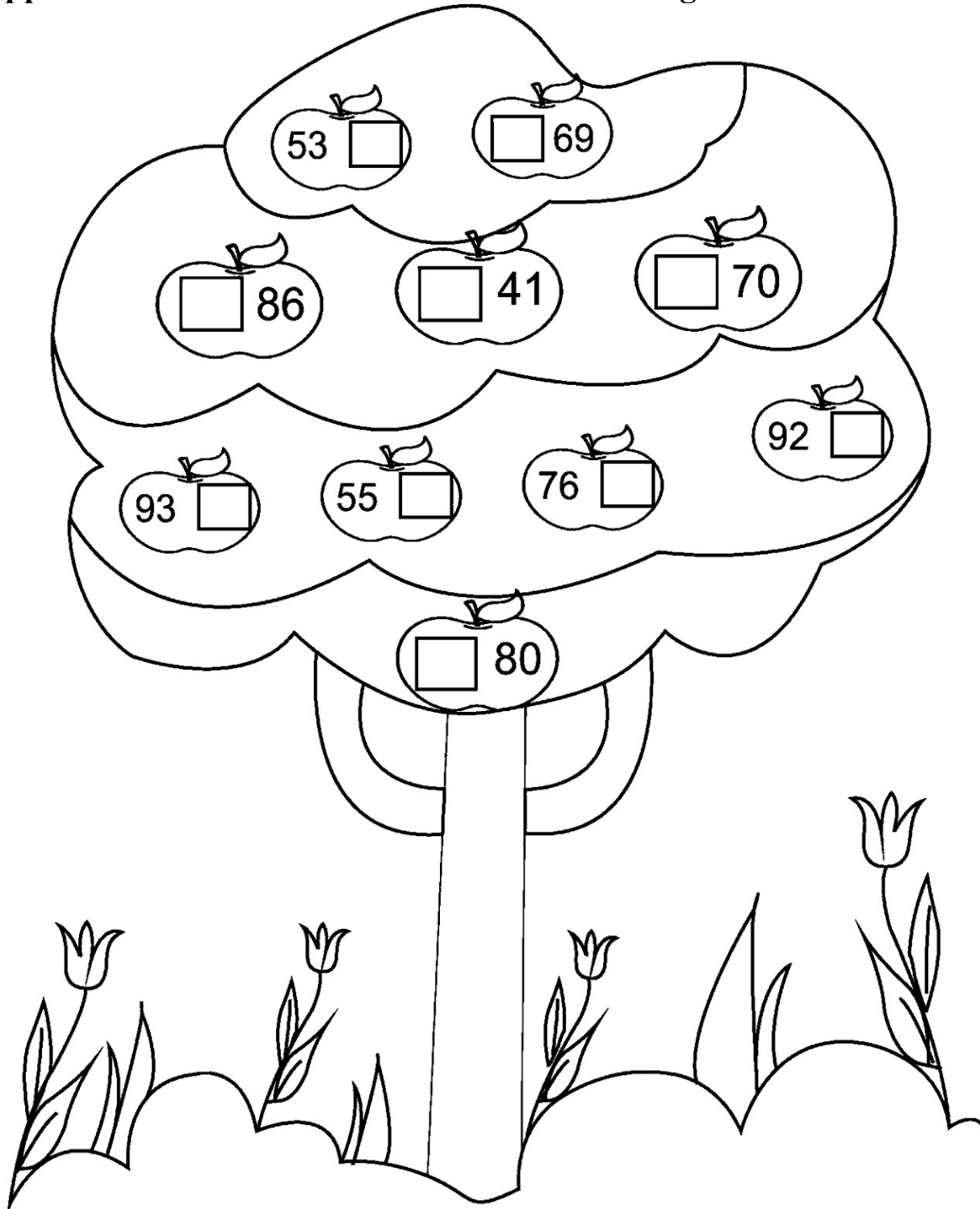
मात्रा की यात्रा

2. 'i' की मात्रा सही स्थान पर लगाएँ-

रम.....	ब.....ज.....
सीत.....	क.....ल.....
राज.....	पपीत.....
अ.....म	द.....म
म.....म.....	र.....ध.....
हर.....	दीय
मीर.....	अ.....ज.....

Name : _____ Class/Sec.: _____

1. Fill the boxes in the apples with appropriate 'before' or 'after' numbers. Colour the apples that have 'before numbers' as answers in red and the apples that have 'after numbers' as answers in green.



2. Solve the following addition and subtraction.

$8 + 4 = \underline{\quad}$

$13 - 4 = \underline{\quad}$

$11 - 9 = \underline{\quad}$

$11 + 0 = \underline{\quad}$

$15 - 11 = \underline{\quad}$

$5 + 7 = \underline{\quad}$

$5 + 9 = \underline{\quad}$

$12 - 6 = \underline{\quad}$

$11 - 6 = \underline{\quad}$

$9 + 5 = \underline{\quad}$

$15 + 0 = \underline{\quad}$

$13 - 6 = \underline{\quad}$

$6 + 6 = \underline{\quad}$

$14 - 9 = \underline{\quad}$

$7 + 4 = \underline{\quad}$

$15 - 5 = \underline{\quad}$

$13 - 5 = \underline{\quad}$

$4 + 7 = \underline{\quad}$

$13 - 3 = \underline{\quad}$

$12 - 2 = \underline{\quad}$

$6 + 8 = \underline{\quad}$

$11 - 6 = \underline{\quad}$

$15 - 7 = \underline{\quad}$

$14 - 8 = \underline{\quad}$

$8 + 3 = \underline{\quad}$

$9 + 3 = \underline{\quad}$

$14 - 3 = \underline{\quad}$

$7 + 5 = \underline{\quad}$

$5 + 9 = \underline{\quad}$

$14 - 4 = \underline{\quad}$

GENERAL KNOWLEDGE

Name : _____ Class/Sec.: _____

1. Tick the correct option.

(i) Which of the following organs is used for tasting food?

nose tongue lips

(ii) Which of the following games is not an outdoor game?

ludo football cricket

(iii) How many colours are there in the National Flag of India?

two three five

(iv) Name two indoor games that you like to play.

(a) _____ (b) _____

(v) Name two outdoor games that you like to play.

(a) _____ (b) _____

(vi) Who is the Prime Minister (PM) of India?

Ans. _____

2. Paste the pictures of:

The Chief Minister of Bihar

The President of India

