



# DELHI PUBLIC SCHOOL GAYA

(Under the aegis of the Delhi Public School Society, New Delhi)  
Affiliated to C.B.S.E, New Delhi Affiliation No.330530, School Code – 65572

## DURGA PUJA HOLIDAY ASSIGNMENT CLASS-II (ACADEMIC SESSION: 2024-25)

Are you looking for some interesting fun learning assignment to make your learning session interesting and engaging? Here in this assignment, you will find some very interesting and engaging tasks that will be fun solving.

### ENGLISH

1. Write *five* sentences about the given picture:



\_\_\_\_\_

\_\_\_\_\_

\_\_\_\_\_

\_\_\_\_\_

\_\_\_\_\_

2. Circle the doing words in the given sentences:

- (a) Reeva is eating chocolate.
- (b) I brush my teeth everyday.
- (c) I am going shopping with my family.
- (d) My friends and I love dancing.

3. Fill in the blanks using am/is/are appropriately:

- (a) Rishav \_\_\_\_\_ eating dinner.
- (b) We \_\_\_\_\_ going to school.
- (c) I \_\_\_\_\_ doing my English homework.

4. See the picture and write proper article for it :



\_\_\_\_\_



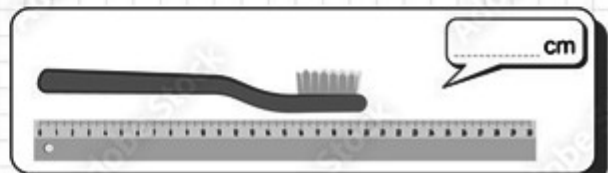
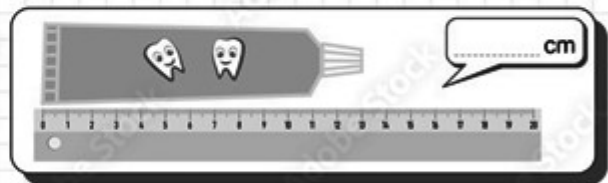
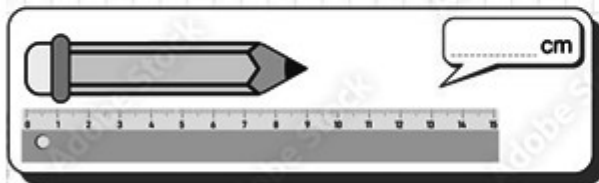

\_\_\_\_\_




5. Draw a picture of your school on an A4 size white sheet and colour it.  
6. Complete the next 3 pages of your cursive writing book.

## MATHEMATICS

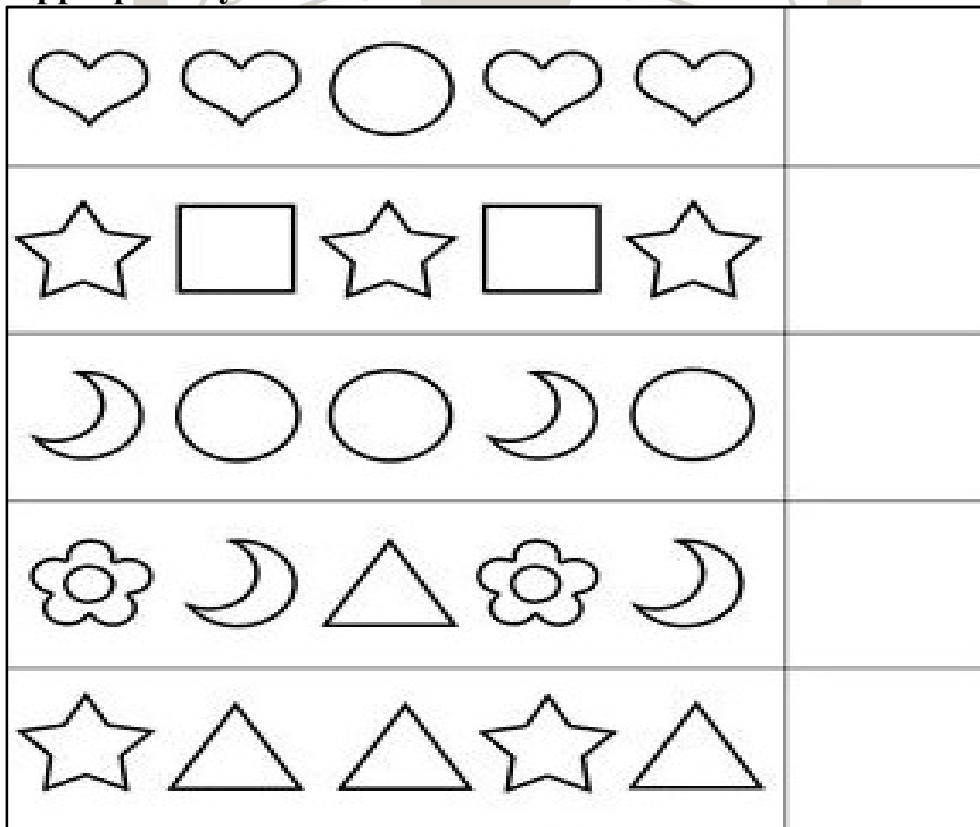
1. Write the measurements of the objects given below:



2. Tick the heavier object from each of the given pairs:

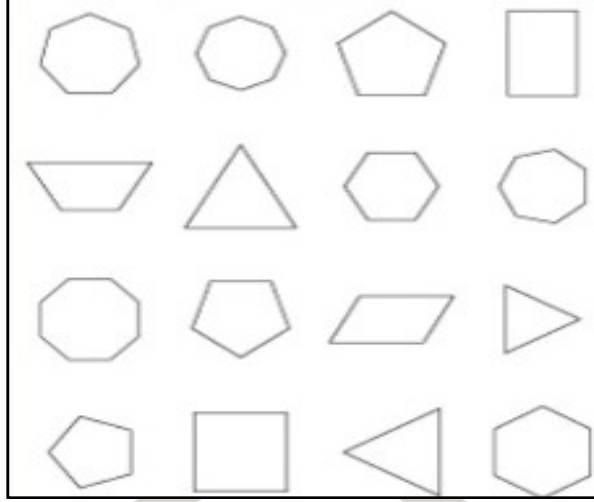


3. Look at each pattern below and use the box on the right to complete it. Colour the patterns appropriately:

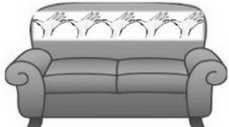




## Mathematics Activity

1. Using Jodo straws, make any three '2D' shapes of your choice.



2. Measure the length of the objects:

|  |   |
|--|---|
| Length of the backrest of the sofa is _____ handspans. |    |
| Length of one side of the table is _____ cubits.       |   |
| Length of one side of your room is _____ footsteps.    |  |

### हिन्दी

1. उल्टे अर्थ वाले शब्दों पर सही का निशान लगाइए।

|                  |                          |              |                          |
|------------------|--------------------------|--------------|--------------------------|
| (क) रोना-गाना    | <input type="checkbox"/> | हँसना-खाना   | <input type="checkbox"/> |
| (ख) दुख-मुख      | <input type="checkbox"/> | सुख-चुप      | <input type="checkbox"/> |
| (ग) भीगा-गीला    | <input type="checkbox"/> | गंदा-सूखा    | <input type="checkbox"/> |
| (घ) खुशबू-खुशहाल | <input type="checkbox"/> | खुशनसीब-बदबू | <input type="checkbox"/> |
| (ङ) गर्म-ठंडा    | <input type="checkbox"/> | गर्मी-सर्दी  | <input type="checkbox"/> |

2. 'में' या 'में' लगाकर वाक्य पूरा कीजिए।

|     |                                   |
|-----|-----------------------------------|
| (क) | होली ..... रंगों का त्योहार है।   |
| (ख) | ..... सबके साथ प्यार से रहता हूँ। |
| (ग) | ..... दीवाली पर मिठाई खाता हूँ।   |
| (घ) | सब नगर-कीर्तन ..... जाते हैं।     |

3. उदाहरण के अनुसार 'र' की मात्रा का सही रूप लगाकर शब्द पूरा कीजिए।

|              |                     |
|--------------|---------------------|
| उदाहरण-क्रम  | किकेट, पेम, कोध, वत |
| उदाहरण-पर्ची | कम, पव, सूय, चचा    |

उदाहरण-राष्ट्र टक, डेस, टेस, डामा

4. निम्नलिखित वाक्यों में संज्ञा शब्दों पर गोला लगाइए।

(क) घोड़ा तेज़ दौड़ता है।

(ख) मोहन ईमानदार लड़का है।

(ग) सब खाना सेहत के लिए अच्छा है।





5. चित्र देखकर नवरात्रि त्योहार के बारे में पाँच वाक्य लिखिए।



6. दुर्गा-पूजा में उपयोग होने वाले कलश का मॉडल बनाइए।

## COMPUTER

1. Name the following storage devices:

|   |   |  |   |
|---|---|--|---|
|  |  |  |  |
| -----   | -----   | -----  | -----   |



**2. Write the full form:**


(a) DVD -----

(b) LED -----

(c) CRT -----

(d) VDU -----

**3. Identify and colour only output and storage devices from the given pictures:**



**4. Draw the picture of a Robot and colour it:**



\*\*\*\*\*