



DELHI PUBLIC SCHOOL GAYA

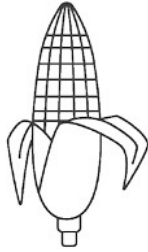
(Under the aegis of the Delhi Public School Society, New Delhi)
Affiliated to C.B.S.E, New Delhi Affiliation No.330530, School Code – 65572

DURGA PUJA HOLIDAY ASSIGNMENT CLASS-I (ACADEMIC SESSION: 2024-25)

Are you looking for some interesting fun learning assignment to make your learning session interesting and engaging? Here in this assignment, you will find some very interesting and engaging tasks that will be fun solving.

ENGLISH

1. Colour the healthy food items *green* and junk food items *red*:



Corn




Banana



Cold drink



Cashews




Chips



Milk



Pizza



Burger



Home
cooked meal



Carrot



















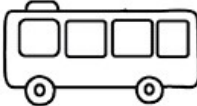








Candy




Cake

2. Identify the pictures with the same beginning sounds as the letters given in the first column and colour the pictures:


O					
P					
M					
B					
C					

MATHEMATICS

1. Use the grid to draw the other half of the given picture by looking at the provided half, filling in the empty spaces, and then colouring the completed artwork to enhance it:



2. Complete the pattern below by identifying the sequence in each row and filling in the blanks with the correct items:



1	2	1	2				
---	---	---	---	--	--	--	--

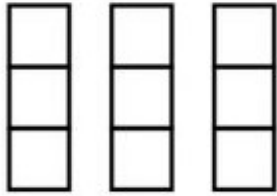
A	B	A	B				
---	---	---	---	--	--	--	--

A	B	C	A	B				
---	---	---	---	---	--	--	--	--

--	--	--	--	--	--	--	--	--	--

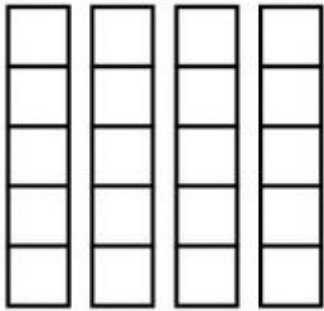
--	--	--	--	--	--	--	--	--	--

3. Solve the given sums:



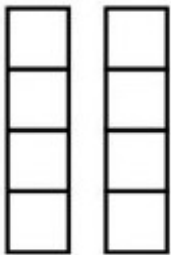
$$3 + 3 + 3 = \underline{\quad}$$

$$3 \times 3 = \underline{\quad}$$



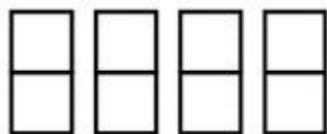
$$5 + 5 + 5 + 5 = \underline{\quad}$$

$$5 \times 4 = \underline{\quad}$$



$$4 + 4 = \underline{\quad}$$

$$4 \times 2 = \underline{\quad}$$


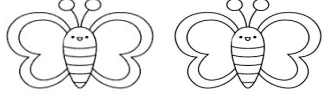

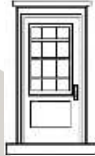
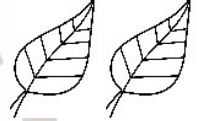


$$2 + 2 + 2 + 2 = \underline{\quad}$$

$$2 \times 4 = \underline{\quad}$$

हिन्दी

1. नीचे दिए गए शब्दों को एक से अनेक करें।

(क)	सड़क-.....	
(ख)	तितली-.....	
(ग)	आँख-.....	
(घ)	दरवाज़ा-.....	
(ङ)	पत्ता-.....	


2. नीचे दिए गए शब्द-समूह में से संज्ञा शब्दों को छाँटकर लिखें:-

कोयल, घड़ी, सुंदर, घर, उड़ना हाथी, बैठना, लंबा, स्कूल, मीठा	
(क)
(ख)
(ग)
(घ)
(ङ)

3. नीचे दिए गए शब्दों के लिए उचित विशेषण शब्द लिखें।

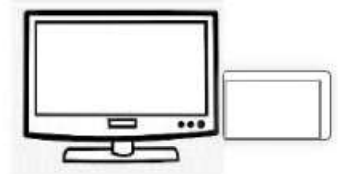


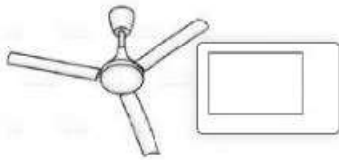
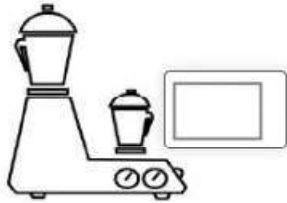
(क) टोपी।
(ख) घर।
(ग) बंदर।
(घ) तितली।
(ङ) फूल।

4. नीचे दिए गए पुल्लिंग शब्दों के सही स्त्रीलिंग रूप लिखें:-

(क)	पिता -	
(ख)	भाई -	
(ग)	मोर -	
(घ)	शेर -	
(ङ)	लड़का -	

COMPUTER

1. Tick (✓) and colour the smart machines made by man:



2. **Guess the parts of a computer and name them.**

- (a) I look like a television.
- (b) I am the brain of a computer.
- (c) I help you in typing your name.
- (d) I am used to click and select any object on the screen.
- (e) You can listen to music if you connect me to your CPU.

